



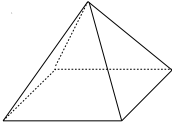

ETITO APTITUDE TEST

THIS INFORMAL TEST HAS BEEN DESIGNED TO ASSIST EMPLOYERS IN MAKING INFORMED DECISIONS ABOUT THE EMPLOYMENT OF PROSPECTIVE APPRENTICES.

ETITO APTITUDE TEST

For each question use the information provided to choose the BEST answer from the four possible options. Your score will be the number of correct answers. Please mark your answers on this paper. You will not need to use a calculator.

There are 24 questions and the maximum time allowed is 20 minutes.

<p>1. What is the cost of 4 items at \$1.50 each?</p> <p>(A) \$6.00 (B) \$5.00 (C) \$4.50 (D) \$4.20</p>	<p>2. How many 40 cent books can you buy for \$3.60?</p> <p>(A) 9 (B) 8 (C) 7 (D) 4</p>
<p>3. 10 more than 4795 is:</p> <p>(A) 4705 (B) 4805 (C) 4815 (D) 489</p>	<p>4. Change 7:30 p.m. to 24-hour time:</p> <p>(A) 07:30 (B) 09:30 (C) 17:30 (D) 19:30</p>
<p>5. The number of hours from 8 a.m. to 4 p.m. on the same day is:</p> <p>(A) 4 (B) 6 (C) 8 (D) 12</p>	<p>6. Round off 47,368 to the nearest hundred:</p> <p>(A) 47,000 (B) 47,300 (C) 47,400 (D) 48,00</p>
<p>7. How many faces does this shape have?</p> <p>(A) 3 (B) 4 (C) 5 (D) 6</p> 	<p>8. Which one of these is the smallest number?</p> <p>(A) 0.25 (B) 0.43 (C) 0.11 (D) 0.07</p>
<p>9. How many seconds are there in 1 minute 24 seconds?</p> <p>(A) 74 (B) 84 (C) 104 (D) 124</p>	<p>10. The mass of a large man is about:</p> <p>(A) 900g (B) 9 kg (C) 90 kg (D) 9 tonnes</p>
<p>11. A brick has a mass of 4kg. What is the mass of 2000 bricks?</p> <p>(A) 500g (B) 2 tonnes (C) 8 tonnes (D) 80 tonnes</p>	<p>12. What fraction of the square is shaded?</p> <p>(A) $\frac{1}{8}$ (B) $\frac{1}{6}$ (C) $\frac{1}{4}$ (D) $\frac{1}{3}$</p> 

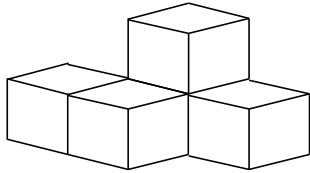
13. Which of these numbers is twice the sum of its digits?

- (A) 36
- (B) 35
- (C) 28
- (D) 18

14. A boat sails for one hour at a certain speed. A second boat sails for two hours at half the speed of the first boat. The first boat sailed:

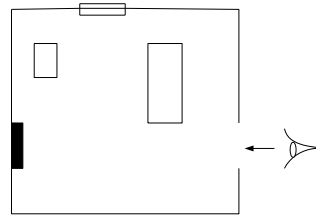
- (A) half as far as the second boat
- (B) twice as far as the second boat
- (C) four times as far as the second boat
- (D) the same distance as the second boat

15. This solid has which view from the top?



- (A)
- (B)
- (C)
- (D)

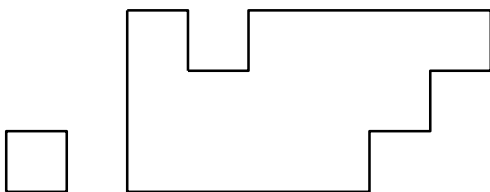
16. Here is a sketch of a lounge room.



If you stood where the eye is and looked in, what would the lounge room look like?

- (A)
- (B)
- (C)
- (D)

17. How many of the square tiles would it take to cover the floor?

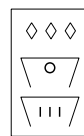


Square Tile

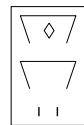
Floor

- (A) 10
- (B) 12
- (C) 14
- (D) 16

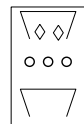
18.



Stands for 368



Stands for 652



What does this stand for?

- (A) 230
- (B) 280
- (C) 735
- (D) 780

19. If each dot is 1cm apart the shape made on the geoboard has what area?

(A) 2 cm²
 (B) 3 cm²
 (C) 4 cm²
 (D) 5 cm²

20. What are the times shown on the clock faces?

(A) 8:00; 10:30; 3:10; 2:20;
 (B) 7:00; 11:30; 2:50; 2:25
 (C) 8:00; 11:30; 2:50; 2:25;
 (D) 8:00; 10:30; 3:10; 2:25

21. How many squares of any size are there in this figure?

(A) 5
 (B) 6
 (C) 10
 (D) 12

22. This shape is made by gluing 5 cubes together. It must then be painted on the tops, sides and bottom. The diagram shows one square that has been painted. What is the total number of squares that must be painted?

(A) 10
 (B) 16
 (C) 20
 (D) 30

23. Read the following sentence carefully and count the number of 'Fs':

FINISHED FILES ARE THE RESULT OF YEARS OF SCIENTIFIC STUDY COMBINED WITH THE EXPERIENCE OF MANY YEARS.

(A) 3
 (B) 4
 (C) 5
 (D) 6

24. Which of the following conditions will give an electric shock?

(A)

(B)

(C)

(D)

THE MASTER SHEET

A TOTAL OF 20 OUT OF 24 [OR BETTER] INDICATES AN ACCEPTABLE LEVEL OF APITUDE.

The more of the questions marked with # correct the better.

1.	<u>A</u>	B	C	D
2.	<u>A</u>	B	C	D
3.	A	<u>B</u>	C	D
4.	A	B	C	<u>D</u>
5.	A	B	<u>C</u>	D
6.	A	B	<u>C</u>	D
7.	A	B	<u>C</u>	D
8.	A	B	C	<u>D</u>
9.	A	<u>B</u>	C	D
10.	A	B	<u>C</u>	D
11.	A	B	<u>C</u>	D
12.	<u>A</u>	B	C	D

13.	A	B	C	<u>D</u>	
14.	A	B	C	<u>D</u>	
15.	A	B	<u>C</u>	D	#
16.	A	B	<u>C</u>	D	#
17.	A	B	<u>C</u>	D	
18.	A	B	<u>C</u>	D	#
19.	A	<u>B</u>	C	D	
20.	A	B	<u>C</u>	D	#
21.	A	B	<u>C</u>	D	
22.	A	B	<u>C</u>	D	#
23.	A	B	C	<u>D</u>	#
24.	A	<u>B</u>	C	D	#